





**DAY THREE**  
**HUNDREDTHS AS DECIMALS**

Watch today’s video on White Rose Home Learning website:  
Year 4, Week 2, Day Three.  
If you can, complete the activities on the website as you watch  
the video.  
Write today’s date and title in your home learning maths book.

**Activity 1:** Complete the table

Image	Words	Fraction	Decimals
	56 hundredths		
		$\frac{17}{100}$	
			0.2
			

**Activity 2:** Write the number as a fraction and as a decimal.

0.01      +      0.01      +      0.01      +      0.01

**Activity 3:** Write the number as a fraction and as a decimal.

0.01      +      0.01      +      0.01

**Activity 4:** Leanna says, “16 hundredths is the same as 1600.”  
Is Leanna correct? Explain your answer.